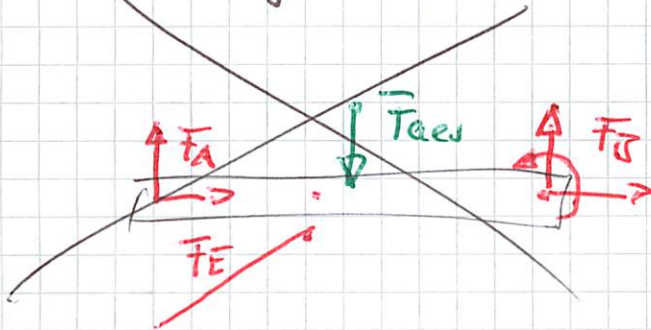


Übungen zum Freimachen

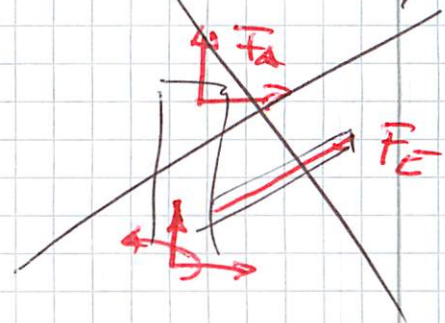
tgfu-j1 19.05.22

- Welche Baugruppe wird freigemacht?
- Wo hat die Baugruppe Kontakt zum RdW
= Wo wirken Kräfte auf die Baugruppe.
- Ist die Aufgabe so lösbar

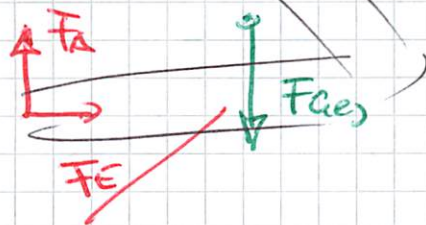
2.1 ~~LS~~ ~~Tragarm 1~~



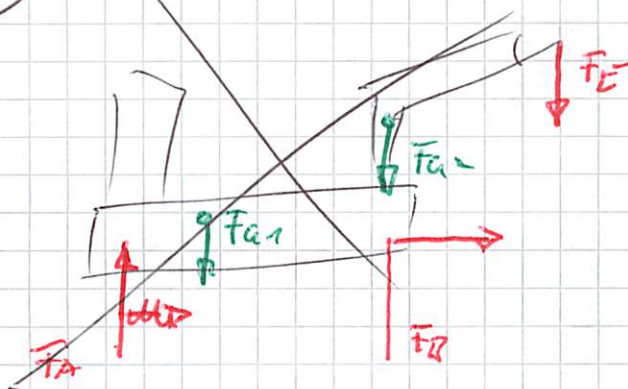
~~Ld~~ ~~Stütze + Zylinder~~



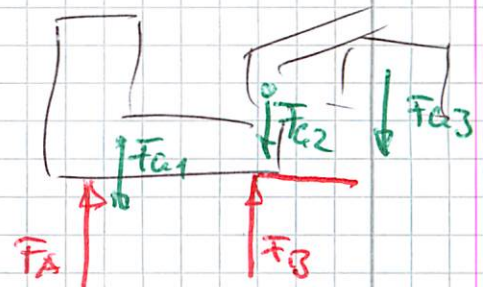
LS ~~Tragarm 1 + 2 + VorS~~ ✓



3.1 ~~LR~~ ~~Lkw + Ksan~~




~~LP~~ ~~Lkw + Gruppe~~



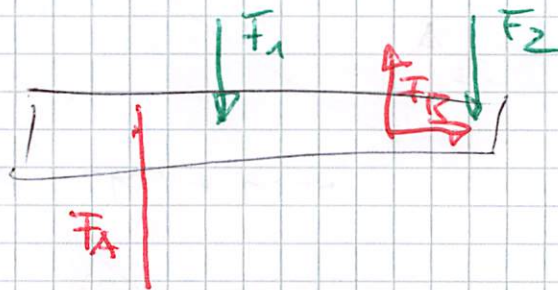
3.3

LP Ausleger + Garag ✓



4.1

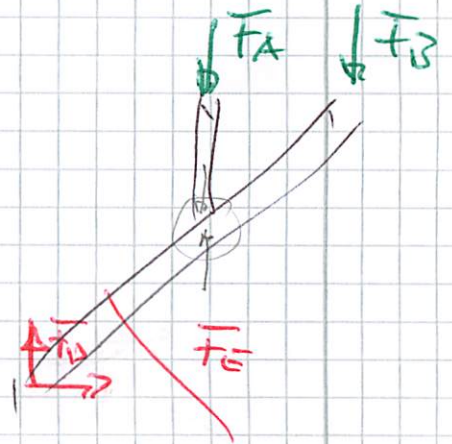
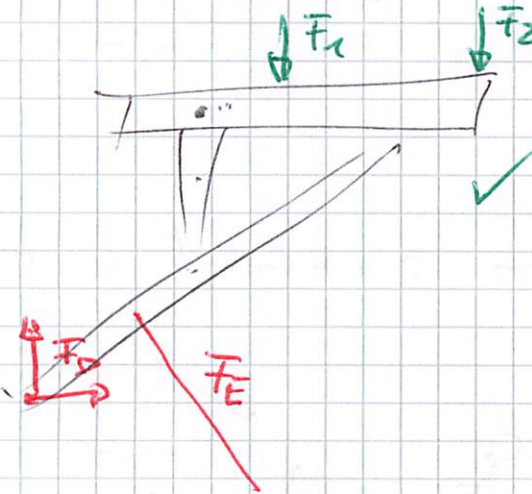
LP U-Stahl / Plattform ✓



4.2

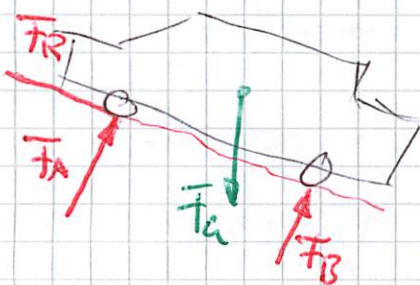
LP Plattform + Hebel

LP Hebel e2y Linde 2

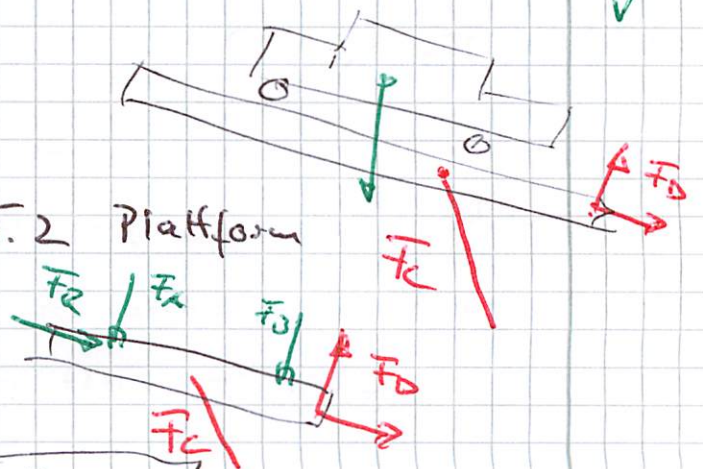


5.1 LP PKW ✓

5.2 LP PKW + Plattform ✓



5.2 Plattform



6 - 9.1

~~8.1 8.4~~

~~1. 26.~~

D. 26.05. 13:30

Mo 25.05. 24:00