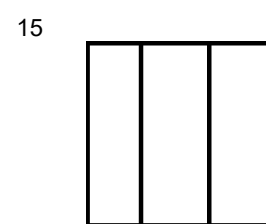
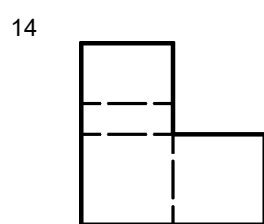
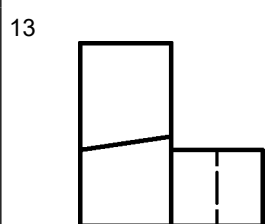
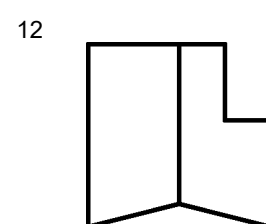
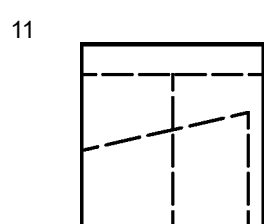
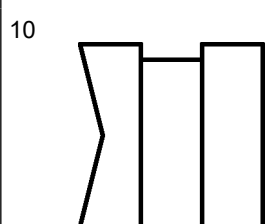
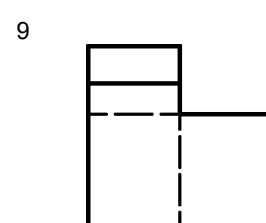
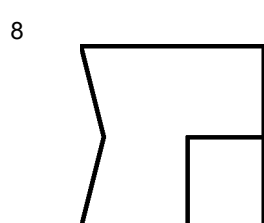
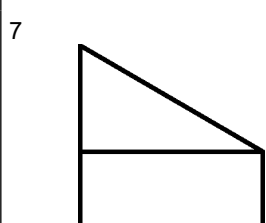
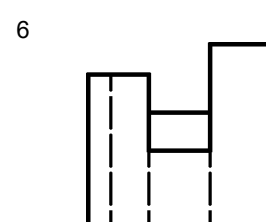
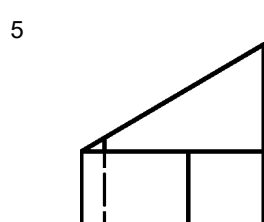
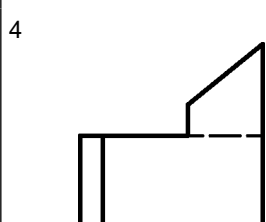
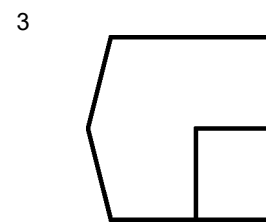
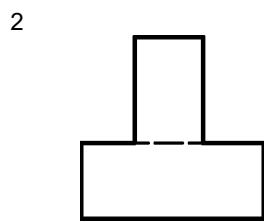
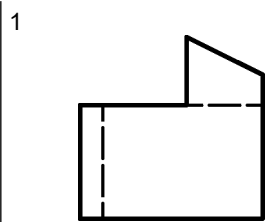
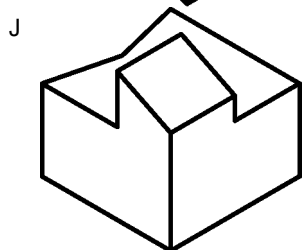
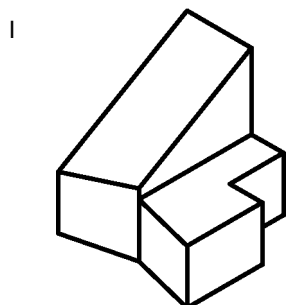
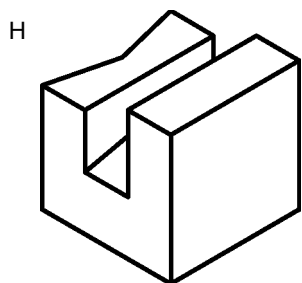
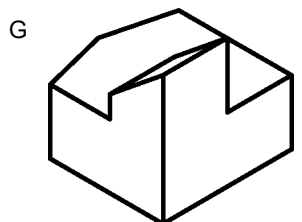
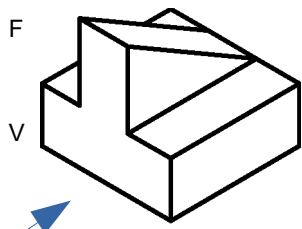


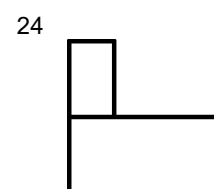
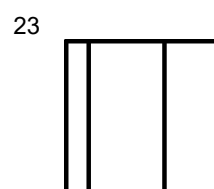
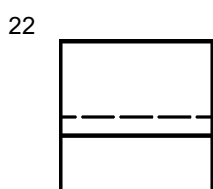
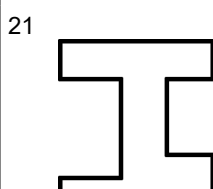
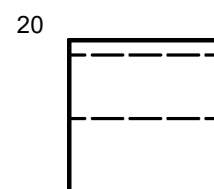
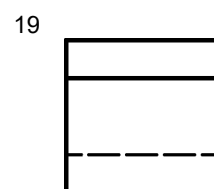
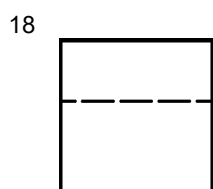
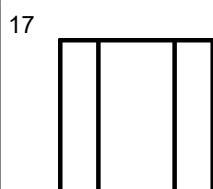
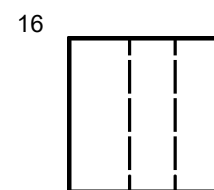
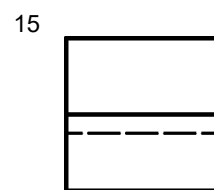
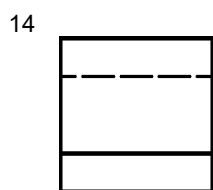
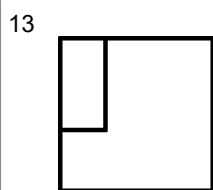
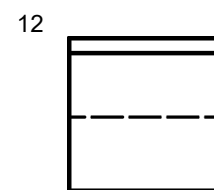
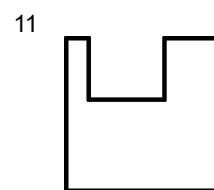
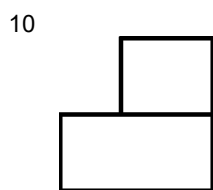
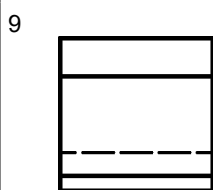
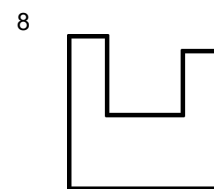
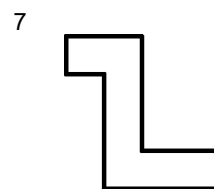
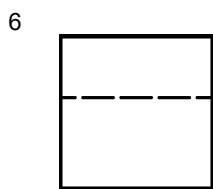
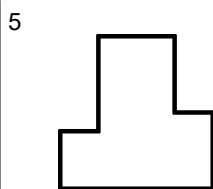
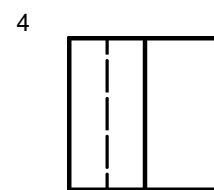
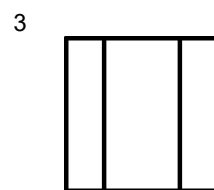
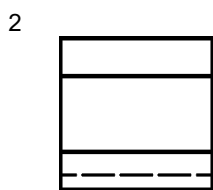
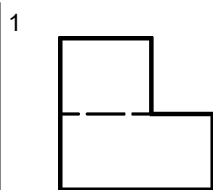
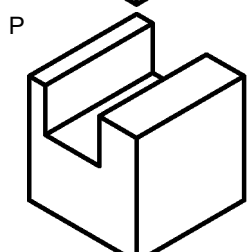
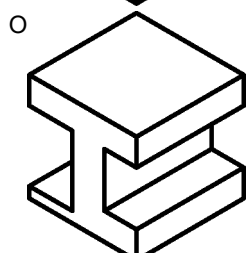
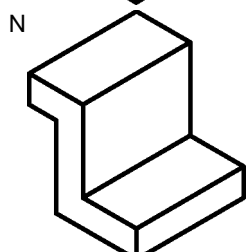
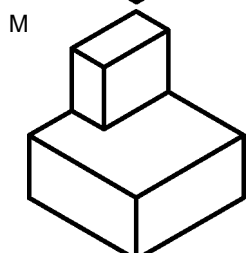
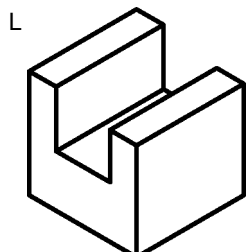
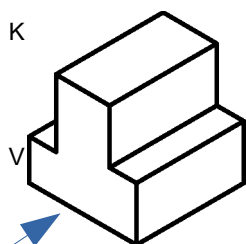
Welche Ansicht gehört zu welchem Teil? Tragen Sie V, S und D für Vorderansicht, Seitenansicht und Draufsicht in die Tabelle ein.

	1	2	3	4	5	6	7	8	9	10	11	12	13	14	15
A															
B															
C															
D															
E															



Welche Ansicht gehört zu welchem Teil? Tragen Sie V, S und D für Vorderansicht, Seitenansicht und Draufsicht in die Tabelle ein.

	1	2	3	4	5	6	7	8	9	10	11	12	13	14	15
F															
G															
H															
I															
J															



Tragen Sie in die Tabelle ein: Vorderansicht, Draufsicht, Seitenansicht von Rechts und Links.

	1	2	3	4	5	6	7	8	9	10	11	12	13	14	15	16	17	18	19	20	21	22	23	24	
K																									
L																									
M																									
N																									
O																									
P																									



Q		1		2		3		4	
R		5		6		7		8	
S		9		10		11		12	
T		13		14		15		16	
U		17		18		19		20	
V		21		22		23		24	

Tragen Sie in die Tabelle S für Seitenansicht und D für Draufsicht ein.

	1	2	3	4	5	6	7	8	9	10	11	12	13	14	15	16	17	18	19	20	21	22	23	24
Q																								
R																								
S																								
T																								
U																								
V																								



Lösungsvorschlag:

	1	2	3	4	5	6	7	8	9	10	11	12	13	14	15																																							
A				V							S					D																																						
B						S		V		D																																												
C			V		S								D																																									
D		V						D						S																																								
E	V									S						D																																						
F		V						S																																														
G			D	V												S																																						
H						V					D	S																																										
I					S								D	V																																								
J	V							D	S									16	17	18	19	20	21	22	23	24																												
K			D		V											R																																						
L								V				R							D				L																															
M	L										R			D																																								
N				D			V							R									L																															
O		R								L									D																																			
P						LR						V																																										
Q							D																																															
R										S																																												
S			D	D																S																																		
T			D	D		S																																																
U													S																																									
V																D																																						
	1	2	3	4	5	6	7	8	9	10	11	12	13	14	15	16	17	18	19	20	21	22	23	24																														